





Q1. Sam plays a maths game. Each  is equal to 2 points.

 +  +  = 10 points

How many points is **one**  equal to?

points

Q2. Write the missing number in each box.

19 $\xrightarrow{\text{is 1 less than}}$

19 $\xrightarrow{\text{is 10 less than}}$

Q3. Choose **two** of these numbers to add together.

27 46 35 39

Write the numbers and the answer in this box.

Q4. There are **4 fewer** boys than girls in Mr Hill's class. There are **18** girls.

(a) How many boys are there in Mr Hill's class?

(b) How many children are there in Mr Hill's class altogether?


Q5. Write five coins that have a total of 37p.

p	p	p	p	p
---	---	---	---	---

Q6. When Desi is 4 years old, Sita is 10

When Desi is 9 years old, how old will Sita be?

years



Q7. Write numbers in the boxes to make this correct.

$$60 + \boxed{} = 100 = 20 + \boxed{}$$

Q8. Ben has 63 beads. He gives 37 beads away. How many beads does Ben have left?

beads

Q9. Ben works out the answer to this

$$57 - 16 =$$

Ben gets the answer 14. Ben's answer is **wrong**. Show Ben how to work out the **correct** answer in the box.

Show your working	<table border="1"><tr><td style="width: 100px; height: 20px;"></td></tr></table>	