





Q1. Amy has 50p. She buys a pencil for 30p.



Tick the purse that shows how much money Amy has left.



Q2. There are 11 boys and 16 girls in Blue Class.

(a) How many children are in Blue Class altogether?

children


(b) There are **more** girls than boys. How many more?

Q3. Ben has 4 red cars, 8 green cars and 3 yellow cars.

Write a sum to work out how many cars he has altogether.



Q4. Sita has these coins in her purse.



How much money does she have?

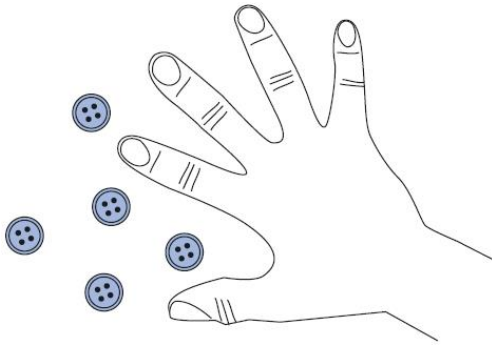
p

Q5. Fill in the two missing numbers in this sequence.

28	24	20		12	8		0
----	----	----	--	----	---	--	---

Q6. Ben puts 15 buttons on a table.

He hides some of them under his hand. How many buttons is Ben hiding?



--

 buttons

Q7. Sophie's book has 50 pages. So far, she has read 9 pages.



How many **more** pages does Sophie have left to read?

--

 pages

Q8. Sam has four number cards.

10

20

30

40

Use **three** of his cards to make these correct.

27	+		=	67
----	---	--	---	----

54	-		=	34
----	---	--	---	----

	+	88	=	98
--	---	----	---	----