

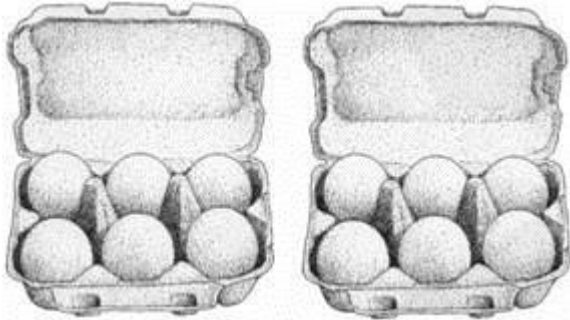
Q1.



How many shells does Amy have?

shells

Q2. There are 6 eggs in each box.



How many eggs are there altogether?

Q3.

Write an equation to represent this story.  
I had 6 balloons.  
Then 2 floated away.  
Now I have 4 balloons.



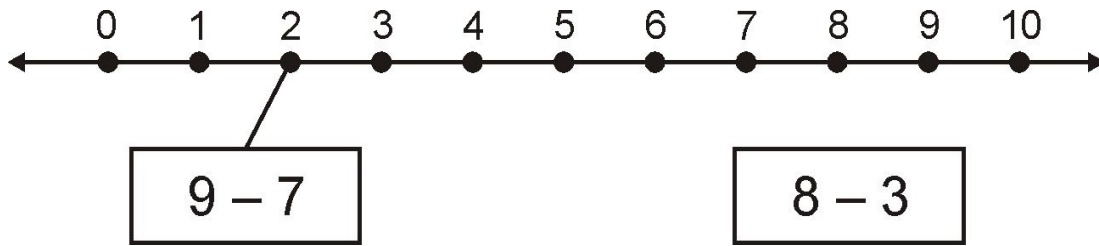
Q4. There are 9 children.

6 of them have scooters and the rest do not.


How many of the children **do not** have scooters?

children

Q5. Match each box to its answer on the number line.



Q6. Which equation matches the picture? Circle it.



$3 + 3 = 6$

$8 = 4 + 3$

$4 = 3 + 1$

$4 + 3 = 7$

Q7. I cycled ~~4~~km to get to my friend's house. I then cycled another 3km with my friend. How far have I cycled?

km

Q8. Write an equation to represent this story.

"There are 2 oranges.

There are 3 apples.

Altogether there are 5 pieces of fruit."



Q9. I have 1 metre of red ribbon. I also have 5 metres of blue ribbon. How many metres of ribbon do I have altogether?

m