




Question 1

Complete the bar models.




Question 2

A shop has 8,435 magazines.

367 are sold in the morning and 579 are sold in the afternoon.

How many magazines are left?



There are ___ magazines left.

Question 3

