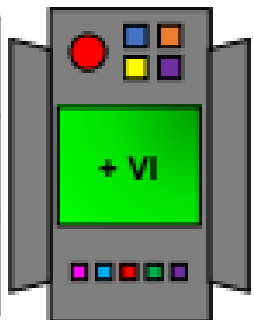


Roman Numerals

1a. Complete the calculations giving your answers as Roman numerals.


VIII		
X		
XIII		



4 VP

Roman Numerals


1b. Complete the calculations giving your answers as Roman numerals.

V		
XVIII		
XV		




4 VP

2a. Complete the bar models.



4 VP

2b. Complete the bar models.



4 VP

3a. Fill in the missing Roman numerals in the number sequences.

	XVIII	XVI	XIV	XII
III	VI		XII	XV



4 VP

3b. Fill in the missing Roman numerals in the number sequences.

XVI	XV	XIV		XII
I		V	VII	IX



4 VP

4a. True or false?

III	+	IX	=	XIII
-----	---	----	---	------



4 VP

4b. True or false?

XIX	-	XII	=	VII
-----	---	-----	---	-----



4 VP

5a. Circle the correct symbol.

	<		
VIII + VII	=	IX + VI	
	>		



4 VP

5b. Circle the correct symbol.

	<		
XVII - XI	=	XX - XIII	
	>		



4 VP